

1 Complete the addition facts.

a)

△	△	△	△
△	△	△	△
△	△	△	△

6 + 6 = 12

b)

○	○	○	○
○	○	○	○
○	○	○	○

3 + 3 + 3 = 9

c)

⊖	⊖	⊖	⊖
⊖	⊖	⊖	⊖
⊖	⊖	⊖	⊖

4 + 4 = 8

d)

⊗	⊗	⊗	⊗
⊗	⊗	⊗	⊗
⊗	⊗	⊗	⊗

5 + 5 + 5 = 15

P

a)

b)

c)

2. Complete the addition and multi-  
plication facts.

a)

3	+	3	+
3	x	3	=
3	times	3	is
		9	

b)

3	+	3	+	3	+
4	x	3	=	12	
4	times	3	is	12	


c)


5	+	5	+	5	+
7	x	5	=	35	
7	times	5	is	35	


19/1/22

H.W


Complete the addition facts.

a)   $2 + 2 = \square$

b)   $4 + 4 + 4 = \square$

c)   $6 + 6 = \square$


2. Complete the addition and multiplication facts

a) 

$7 + 7 + 7 + 7 = \square$

$4 \times 7 = \square$


4 times 7 is  $\square$

b) 

$2 + 2 + 2 = \square$

$3 \times 2 = \square$

3 times 2 is  $\square$

c) 

$4 + 4 = \square$

$2 \times 4 = \square$

2 times 4 is  $\square$