

17-1-2022

What is Multiplication?

Look at the pictures and complete H.

statements.




There are 3 groups of balls.

There are 3 balls in each group.
3 + 3 + 3 = 9 balls in all.



There are 2 groups of flowers.

There are 4 flowers in each group.
4 + 4 = 8 flowers in all.



There are 4 groups of stars.

There are 5 stars in each group.
5 + 5 + 5 + 5 = 20 stars in all.

ANS.

Look at the pictures and complete the

sentences

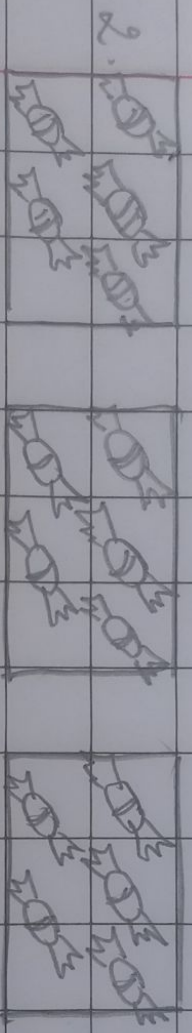
1.

Δ	Δ				
Δ	Δ				
Δ		Δ	Δ		
Δ		Δ	Δ		
		Δ	Δ		
		Δ	Δ		

There are _____ groups of triangles.

There are _____ triangles in each group


+ _____ + _____ = _____ triangles in all.



There are _____ groups of fishes.

There are _____ fishes in each group.

+ _____ + _____ = _____ fishes in all.



There are _____ groups of apples.

There are _____ apples in each group.

+ _____ + _____ = _____ apples in all.